



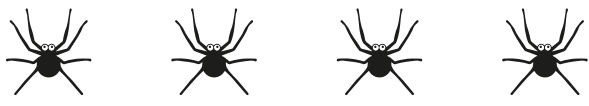
Consolidate 2, 4 and 8 times-tables

1 How many legs are there altogether?

Complete the multiplications


a)  $\square \times \square = \square$

b)  $\square \times \square = \square$

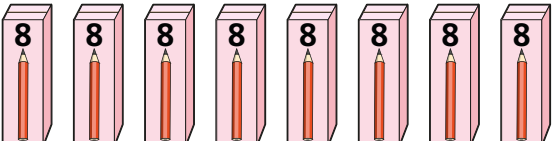
c)  $\square \times \square = \square$

2 How many pencils are there?

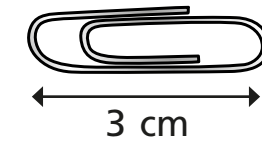
Complete the multiplications.

a)  $\square \times \square = \square$

b)  $\square \times \square = \square$

c)  $\square \times \square = \square$

3 A paper clip is 3 cm long.



a) What is the total length of 2 paper clips?

cm

b) What is the total length of 4 paper clips?

cm

c) What is the total length of 8 paper clips?

cm

4 Complete the multiplications.

a) $1 \times 2 = \square$ b) $1 \times 4 = \square$ c) $1 \times 8 = \square$

$2 \times 2 = \square$ $2 \times 4 = \square$ $2 \times 8 = \square$

$3 \times 2 = \square$ $3 \times 4 = \square$ $3 \times 8 = \square$

$4 \times 2 = \square$ $4 \times 4 = \square$ $4 \times 8 = \square$

$5 \times 2 = \square$ $5 \times 4 = \square$ $5 \times 8 = \square$

What do you notice?



5 Complete the multiplications.

a) $6 \times 4 = \square$

e) $8 \times 4 = \square$

b) $2 \times 10 = \square$

f) $2 \times 11 = \square$

c) $7 \times 8 = \square$

g) $4 \times 9 = \square$

d) $12 \times 2 = \square$

h) $10 \times 8 = \square$

6 Work out the missing numbers.

a) $\square \times 8 = 16$

d) $8 \times \square = 0$

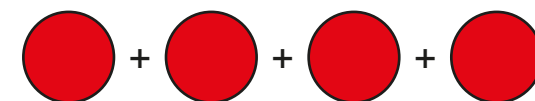
b) $4 \times \square = 20$

e) $2 \times 4 \times \square = 64$

c) $24 = \square \times 2$


f) $40 = \square \times 5 \times \square$


7 Work out the value of each shape.


 = 16

 = 32

 = $\square \times \square \times \square$

 = \square

 = \square

 = \square

8 Tennis balls come in packets of 2, 4 and 8

Rosie buys 5 of each different size pack.

How many tennis balls does she buy altogether?

Show your workings.



\square

